

# VIRGOLA E DECIMALI

**1** Inserisci i numeri nella tabella, poi riscrivili in ordine crescente.

La **virgola** separa la parte intera dalla parte decimale

	Parte intera					Parte decimale		
	uk	h	da	u	,	d	c	m
0,183				0	,	1	8	3
8,206					,			
2148,009					,			
18,245					,			
362,48					,			
240,5					,			

.....

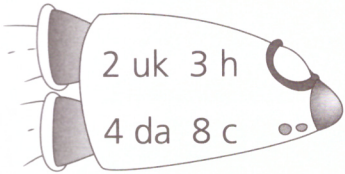
.....


.....


.....

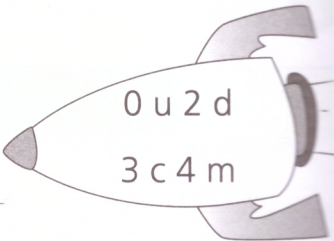
.....

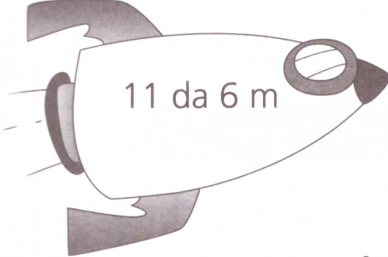
**2** Unisci con una freccia ogni astronave al suo astronauta.




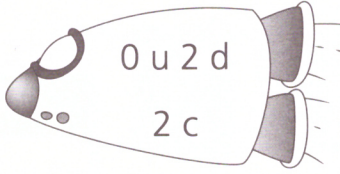

































**3** Scrivi il numero decimale corrispondente.

- |              |         |                  |         |
|--------------|---------|------------------|---------|
| 0 u 3 d      | ▶ 0,3   | 128 u 8 m        | ▶ ..... |
| 2 u 2 d 6 c  | ▶ ..... | 146 u 6 m        | ▶ ..... |
| 11 u 5 d 3 c | ▶ ..... | 5 h 3 da 6 d 1 m | ▶ ..... |
| 18 u 146 m   | ▶ ..... | 6 h 3 u 88 m     | ▶ ..... |
| 8 u 18 c     | ▶ ..... | 2 h 18 c         | ▶ ..... |
| 32 u 9 c     | ▶ ..... | 328 m            | ▶ ..... |

